

Please check the examination details below before entering your candidate information

Candidate surname					Other names			
Centre Number					Candidate Number			
Pearson Edexcel Level 1/Level 2 GCSE (9–1)					<input type="text"/> <input type="text"/> <input type="text"/> <input type="text"/> <input type="text"/>			
Thursday 14 May 2020								
Morning (Time: 1 hour 45 minutes)					Paper Reference 1CH0/1F			
Chemistry Paper 1 <div style="text-align: right;">Foundation Tier</div>								
You must have: Calculator, ruler							Total Marks <input type="text"/>	

Instructions

- Use **black** ink or ball-point pen.
- **Fill in the boxes** at the top of this page with your name, centre number and candidate number.
- Answer **all** questions.
- Answer the questions in the spaces provided
– *there may be more space than you need.*
- Calculators may be used.
- Any diagrams may NOT be accurately drawn, unless otherwise indicated.
- You must **show all your working out** with **your answer clearly identified** at the **end of your solution**.

Information

- The total mark for this paper is 100.
- The marks for each question are shown in brackets
– *use this as a guide as to how much time to spend on each question.*
- In questions marked with an **asterisk** (*), marks will be awarded for your ability to structure your answer logically showing how the points that you make are related or follow on from each other where appropriate.
- There is a periodic table on the back cover of the paper.

Advice

- Read each question carefully before you start to answer it.
- Try to answer every question.
- Check your answers if you have time at the end.

Turn over ►

P62083RA

©2020 Pearson Education Ltd.

1/1/1/1/1/1/



Pearson

Answer ALL questions. Write your answers in the spaces provided.

Some questions must be answered with a cross in a box .
If you change your mind about an answer, put a line through the box and then mark your new answer with a cross .

- 1 (a) When solid sodium chloride is mixed with water, sodium chloride solution forms.

What name is given to the process of mixing a solid with water to form a solution?

(1)

- A crystallising
 B diluting
 C dissolving
 D melting

- (b) Sodium reacts with hydrochloric acid to form sodium chloride and hydrogen.

(i) Write the word equation for this reaction.

(2)

→

(ii) The hazard symbol shown in Figure 1 is used on containers of sodium.



Figure 1

What is the meaning of this hazard symbol?

(1)

- A corrosive
 B flammable
 C oxidising
 D toxic

DO NOT WRITE IN THIS AREA

DO NOT WRITE IN THIS AREA

DO NOT WRITE IN THIS AREA



(iii) Hydrogen has one electron in its electron shell.

Figure 2 shows the incomplete dot and cross diagram of a hydrogen molecule.

Complete Figure 2 to show the electrons in the covalent bond between the two atoms of hydrogen.

(1)

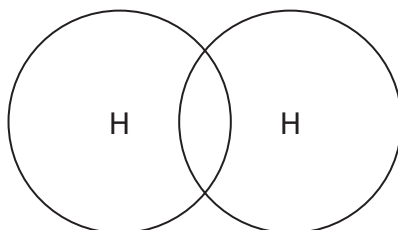


Figure 2

(c) The pH of a sodium chloride solution was measured.

(i) State what could be used to measure the pH of a solution.

(1)

(ii) Sodium chloride solution is neutral.

Give the pH of this solution.

(1)

(Total for Question 1 = 7 marks)

DO NOT WRITE IN THIS AREA

DO NOT WRITE IN THIS AREA

DO NOT WRITE IN THIS AREA



2 Chlorine has an atomic number of 17.

(a) Figure 3 shows the arrangement of electrons in an atom of chlorine.

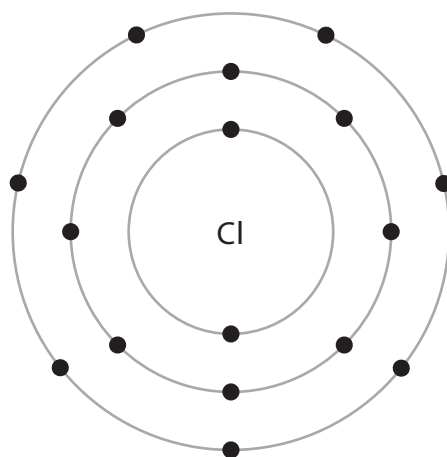


Figure 3

(i) What is the electronic configuration of this atom?

(1)

- A 10.7
- B 17
- C 2.8.7
- D 7.8.2

(ii) Explain, using Figure 3, why chlorine belongs to group 7 of the periodic table.

(2)

.....

.....

.....

.....

DO NOT WRITE IN THIS AREA

DO NOT WRITE IN THIS AREA

DO NOT WRITE IN THIS AREA



- (b) The nucleus of an atom is made up of protons and neutrons.
Atoms of chlorine contain 17 protons.

Figure 4 shows some information about a proton, a neutron and an electron.

	relative mass	relative charge
proton	1	+1
neutron	1	0
electron	very small	-1

Figure 4

- (i) Explain, using the information in Figure 3 and Figure 4, why atoms of chlorine have no overall charge.

(2)

- (ii) Atoms of chlorine-37 have a mass number of 37.

Calculate the number of neutrons in atoms of chlorine-37.

(1)

number of neutrons =

- (iii) There are two isotopes of chlorine, chlorine-35 and chlorine-37.

Explain the meaning of the term **isotopes**.

(2)

(Total for Question 2 = 8 marks)



DO NOT WRITE IN THIS AREA

DO NOT WRITE IN THIS AREA

DO NOT WRITE IN THIS AREA

BLANK PAGE



DO NOT WRITE IN THIS AREA

DO NOT WRITE IN THIS AREA

DO NOT WRITE IN THIS AREA

3 In industry, ammonia is manufactured by reacting nitrogen with hydrogen.

(a) (i) Give the name of the industrial process used to manufacture ammonia. (1)

(ii) Write the word equation for this reaction, including the correct symbol to show that the reaction is reversible. (3)

(b) The formula of ammonia is NH_3 .

State what the formula of ammonia shows about the number of nitrogen atoms and the number of hydrogen atoms combined in a molecule of ammonia. (1)

(c) Most of the ammonia manufactured in industry is used to produce fertilisers.

(i) A fertiliser is made by reacting ammonia with nitric acid.
What is the name of this fertiliser? (1)

- A ammonia nitrate
- B ammonia nitric
- C ammonium nitrate
- D ammonium nitric

(ii) Explain the importance of fertilisers in farming. (2)

(Total for Question 3 = 8 marks)



- 4 (a) In the 19th century, Mendeleev arranged the elements known at the time to form his periodic table.

Mendeleev's periodic table is different from the modern periodic table.

State **one** difference between Mendeleev's periodic table and the modern periodic table.

(1)

DO NOT WRITE IN THIS AREA

DO NOT WRITE IN THIS AREA

DO NOT WRITE IN THIS AREA

- (b) Aluminium oxide reacts with hydrochloric acid to form a salt and water.

(i) State the name of the salt formed.

(1)

(ii) In this reaction aluminium oxide is a base.

State the type of reaction that takes place when an acid reacts with a base.

(1)

- (c) Gallium, Ga, is in the same group of the modern periodic table as aluminium.

The formula of aluminium oxide is Al_2O_3 .

(i) Predict the formula of gallium oxide.

(1)

(ii) Gallium oxide has a very high melting point.

Gallium oxide does not conduct electricity when solid but does conduct electricity when molten.

What type of substance is gallium oxide?

(1)

- A giant covalent
- B ionic
- C metallic
- D simple molecular



(d) Figure 5 shows the changes of state for gallium and the arrangement of particles in liquid gallium.

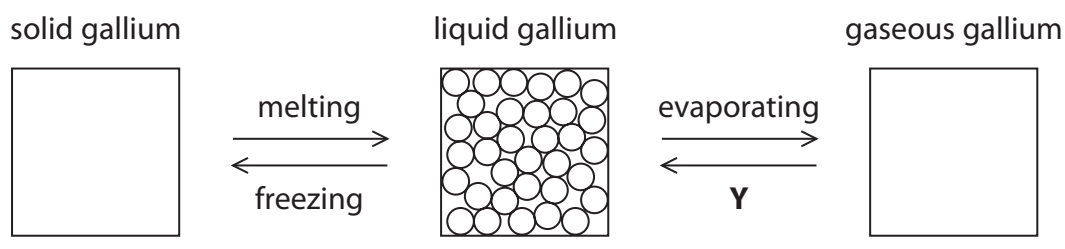


Figure 5

- (i) Complete the boxes for solid gallium and gaseous gallium by drawing the arrangement of the particles in each of these physical states. (2)
- (ii) Give the name of the change of state labelled **Y** in Figure 5. (1)

.....

(e) Gallium metal is a conductor of electricity.

Explain how metals conduct electricity. (2)

.....

(Total for Question 4 = 10 marks)

DO NOT WRITE IN THIS AREA

DO NOT WRITE IN THIS AREA

DO NOT WRITE IN THIS AREA



DO NOT WRITE IN THIS AREA

DO NOT WRITE IN THIS AREA

DO NOT WRITE IN THIS AREA

BLANK PAGE



5 Transition metals have many uses.

(a) The pie chart in Figure 6 shows the uses of one transition metal.

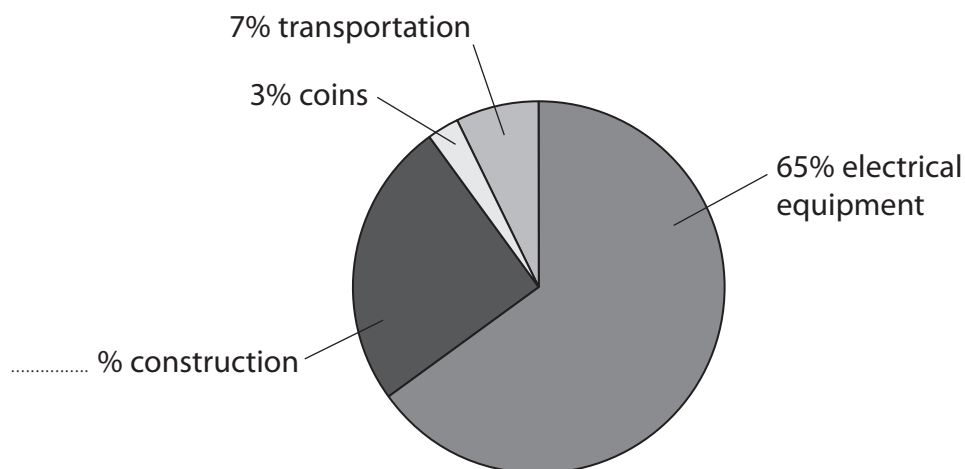


Figure 6

Calculate the percentage of this transition metal used in construction.

(1)

percentage of this transition metal used in construction =

(b) Figure 7 shows five statements about iron.

Put ticks (✓) in the boxes in Figure 7 to show which statements are true and which statements are false.

The first one has been done for you.

(3)

	true	false
iron is a poor conductor of heat		✓
iron can act as a catalyst		
iron forms compounds that are coloured		
iron has a low density		
iron has a very high melting point		

Figure 7



(c) Most iron produced is converted into alloys of iron.

(i) State why alloys have more uses than pure metals.

(1)

(ii) An alloy of iron contains 0.40% of molybdenum.

Calculate the mass of molybdenum contained in a 30 g sample of this alloy of iron.

(2)

mass of molybdenum = g

DO NOT WRITE IN THIS AREA

DO NOT WRITE IN THIS AREA

DO NOT WRITE IN THIS AREA



(d) Many transition metals are used to make the reactants in chemical cells.

Figure 8 shows a graph of the voltage produced by a chemical cell as it is used in a torch for many hours.

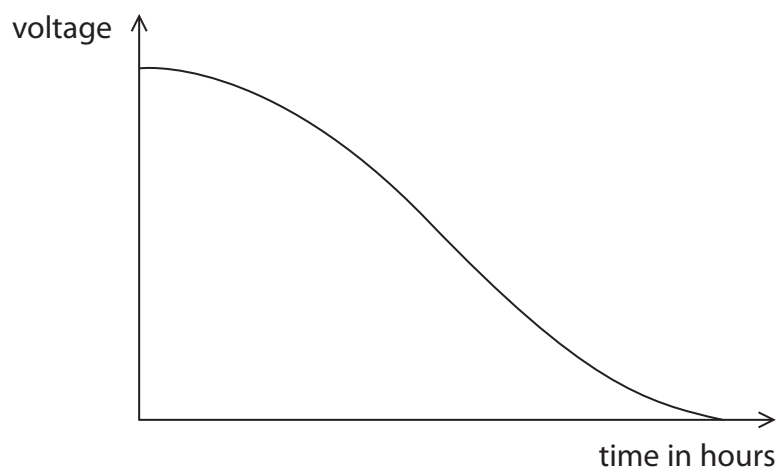


Figure 8

Suggest an explanation for the shape of the graph.

(2)

(Total for Question 5 = 9 marks)

DO NOT WRITE IN THIS AREA

DO NOT WRITE IN THIS AREA

DO NOT WRITE IN THIS AREA



- 6 Some metals are found in the Earth's crust as uncombined elements.
Reactive metals are found in ores.

In ores, metals are combined with other elements.

- (a) Which of these metals is found as the uncombined element in the Earth's crust? (1)

- A aluminium
 B gold
 C potassium
 D zinc

- (b) Give **two** advantages of recycling metals rather than extracting metals from their ores. (2)

1.....

 2.....

- (c) An ore of iron is mostly iron oxide, Fe_2O_3 .
Iron can be extracted from this iron oxide by heating it with carbon.

Balance this equation for the reaction that takes place.

(1)



- (d) Most copper ores are described as low grade.
This means that the percentage of copper in the ore is very small.

5000 kg of one copper ore was found to contain 42.5 kg of copper.

Calculate the percentage of copper in this ore.

(2)

.....

percentage of copper in ore =

DO NOT WRITE IN THIS AREA

DO NOT WRITE IN THIS AREA

DO NOT WRITE IN THIS AREA



- (e) In one stage of the extraction of lead from its ore, lead oxide is heated strongly with carbon.

The equation for the reaction is



Explain, using this equation, which substance has been oxidised in this reaction.

(2)

.....

.....

.....

.....

- (f) A titanium ore was analysed and found to contain 12 g of titanium atoms combined with 8.0 g of oxygen atoms.

Calculate the empirical formula of this titanium compound.
(relative atomic masses: Ti = 48, O = 16)

You must show your working.

(3)

.....

.....

.....

.....

.....

empirical formula =

(Total for Question 6 = 11 marks)

DO NOT WRITE IN THIS AREA

DO NOT WRITE IN THIS AREA

DO NOT WRITE IN THIS AREA



7 (a) Iron rusts when it is left in certain conditions.

(i) Figure 9 shows the apparatus used to investigate the rusting of some iron nails.

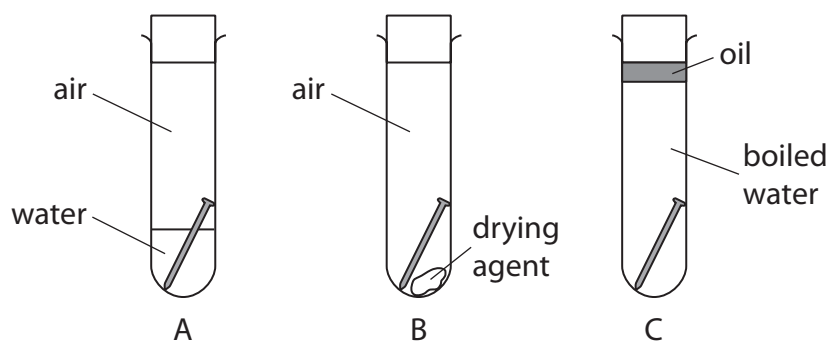


Figure 9

Explain why the iron nail in tube A would rust but the iron nails in tubes B and C would not rust.

(3)

.....

.....

.....

.....

.....

.....

DO NOT WRITE IN THIS AREA

DO NOT WRITE IN THIS AREA

DO NOT WRITE IN THIS AREA



- (ii) Magnesium is more reactive than iron.
Figure 10 shows an iron nail with a strip of magnesium wrapped around it, placed in some water. The tube was left for a few days.

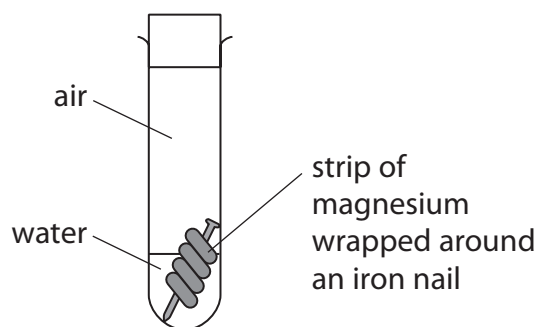


Figure 10

State what would happen to this iron nail.

(1)

- (iii) When iron rusts, a brown solid forms on the surface of the iron.

What happens to the iron as the rust forms?

(1)

- A** the iron is hydrated
- B** the iron is neutralised
- C** the iron is oxidised
- D** the iron is reduced

(b) Give **one** reason why metals are electroplated.

(1)



DO NOT WRITE IN THIS AREA

DO NOT WRITE IN THIS AREA

DO NOT WRITE IN THIS AREA

*(c) The pure metals aluminium, copper and gold and the alloys brass and magnalium are used to make many useful articles.

The way in which these metals and alloys are used is related to their properties, such as their density, electrical conductivity, resistance to corrosion and strength.

State some uses of aluminium, copper, gold, brass and magnalium and explain how each use is related to their properties.

(6)

Area with horizontal dotted lines for writing the answer.



DO NOT WRITE IN THIS AREA

DO NOT WRITE IN THIS AREA

DO NOT WRITE IN THIS AREA

Handwriting practice area with 20 horizontal dotted lines.

(Total for Question 7 = 12 marks)



- 8 Figure 11 shows the apparatus that can be used to electrolyse sodium sulfate solution using inert electrodes.

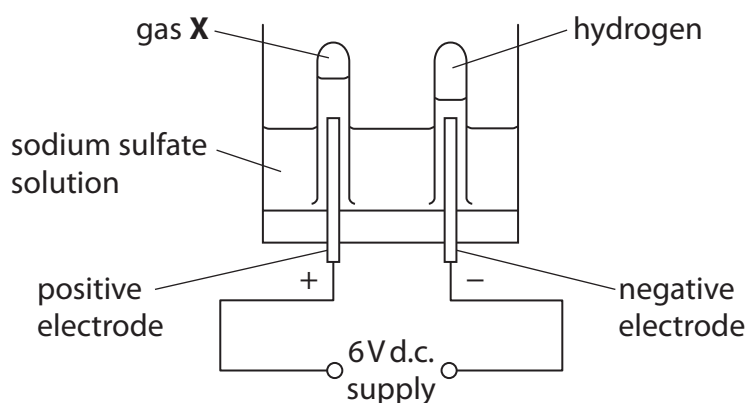


Figure 11

- (a) Hydrogen is produced at the negative electrode during electrolysis.

(i) Describe the test to show the gas is hydrogen.

(2)

.....

.....

.....

.....

(ii) What is the name of gas X that forms at the positive electrode?

(1)

- A ammonia
- B oxygen
- C nitrogen
- D sulfur dioxide

(iii) State what is meant by the term **electrolysis**.

(2)

.....

.....

.....

.....

DO NOT WRITE IN THIS AREA

DO NOT WRITE IN THIS AREA

DO NOT WRITE IN THIS AREA



- (b) The sodium sulfate solution was made by dissolving 28.4 g of sodium sulfate in water to make 250 cm³ of solution.

Calculate the concentration of this solution in g dm⁻³.

Give your answer to three significant figures.

(3)

concentration = g dm⁻³

- (c) The ions present in sodium sulfate are

sodium	Na ⁺
sulfate	SO ₄ ²⁻

Write the formula of sodium sulfate using this information.

(1)

- (d) (i) In Figure 11, the gases given off at the electrodes are collected in test-tubes. However, the actual volume of gases cannot be measured using these test-tubes.

Suggest what apparatus could be used in place of the test-tubes in Figure 11 to measure the volume of gases given off.

(1)

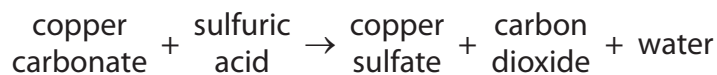
- (ii) State what could be added into the circuit to show a current is flowing during electrolysis.

(1)

(Total for Question 8 = 11 marks)



9 The word equation for the reaction between copper carbonate and dilute sulfuric acid is



(a) (i) Complete the balanced equation for this reaction.

(2)



(ii) Calculate the relative formula mass of copper carbonate, CuCO_3 .
(relative atomic masses: C = 12.0, O = 16.0, Cu = 63.5)

(2)

.....

.....

.....

relative formula mass of CuCO_3 =

(iii) What is the chemical test to show that a gas is carbon dioxide?

(1)

- A bubble the gas through limewater, limewater turns cloudy
- B put damp blue litmus paper in the gas, litmus paper turns red
- C put a lighted splint into the gas, splint is extinguished
- D measure the pH of the gas, pH = 4

DO NOT WRITE IN THIS AREA

DO NOT WRITE IN THIS AREA

DO NOT WRITE IN THIS AREA



- (b) Figure 12 shows a conical flask containing dilute sulfuric acid. Copper carbonate is added to the acid in the flask. The copper carbonate is added one spatula measure at a time until the reaction has finished.

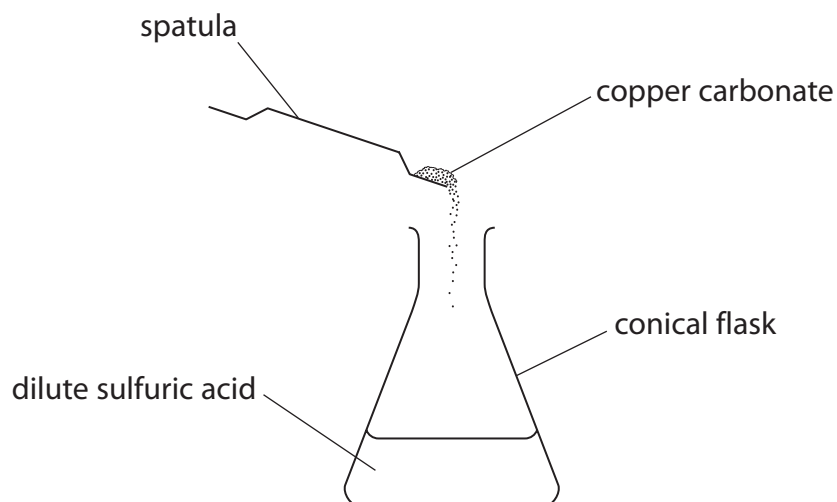


Figure 12

- (i) State **two** observations that would show the reaction has finished.

(2)

1

2



*(ii) Describe how you would obtain a solution of copper sulfate from the mixture and how you would obtain pure, dry copper sulfate crystals from this solution.

Your description should include the apparatus you would use.

You may wish to use diagrams in your answer.

(6)

DO NOT WRITE IN THIS AREA

DO NOT WRITE IN THIS AREA

DO NOT WRITE IN THIS AREA



DO NOT WRITE IN THIS AREA

DO NOT WRITE IN THIS AREA

DO NOT WRITE IN THIS AREA

(Total for Question 9 = 13 marks)



DO NOT WRITE IN THIS AREA

DO NOT WRITE IN THIS AREA

DO NOT WRITE IN THIS AREA

BLANK PAGE



- 10** Potassium hydroxide reacts with hydrochloric acid to form potassium chloride and water.



- (a) A student carried out a titration to find the exact volume of dilute hydrochloric acid that reacted with 25.0 cm^3 of potassium hydroxide solution.

There were five steps in the titration.
The steps shown are not in the correct order.

step J pour the potassium hydroxide solution into a conical flask and add a few drops of indicator to this solution

step K fill a burette with the dilute hydrochloric acid and record the initial reading from the burette

step L use a measuring cylinder to obtain 25 cm^3 of potassium hydroxide solution

step M take a final reading from the burette and calculate the volume of the dilute hydrochloric acid reacted

step N run the dilute hydrochloric acid from the burette into the conical flask until the indicator changes colour

- (i) Write the steps in the correct order.

Some of the steps have been completed for you.

(1)

first step

last step

K				M
----------	--	--	--	----------

- (ii) Suggest an alternative piece of apparatus that could be used in step L to obtain exactly 25.0 cm^3 of potassium hydroxide solution.

(1)

DO NOT WRITE IN THIS AREA

DO NOT WRITE IN THIS AREA

DO NOT WRITE IN THIS AREA



(b) A student was then asked to produce a pure sample of solid potassium chloride.

After finding the volume of acid reacted in step M, the student added this volume of acid to a fresh 25.0 cm^3 sample of the potassium hydroxide solution. This mixture was then evaporated.

(i) Explain why this new mixture was evaporated rather than the original mixture from the titration, to produce a pure sample of solid potassium chloride.

(2)

(ii) After evaporation, the mass of the potassium chloride was determined.

The theoretical yield of the experiment was 0.70 g.

The actual yield was 0.84 g.

This gave a percentage yield greater than 100%.

Calculate the percentage yield of this experiment.

(2)

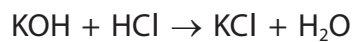
percentage yield =

(iii) Suggest a reason why the actual yield was greater than the theoretical yield.

(1)



- (iv) The equation for the reaction between potassium hydroxide solution and dilute hydrochloric acid is



Calculate the atom economy for the production of potassium chloride from potassium hydroxide and hydrochloric acid.

(relative formula masses: KOH = 56.0, HCl = 36.5, KCl = 74.5, H₂O = 18.0)

Give your answer to one decimal place.

(4)

.....

.....

.....

.....

.....

.....

.....

atom economy = %

(Total for Question 10 = 11 marks)

TOTAL FOR PAPER = 100 MARKS



DO NOT WRITE IN THIS AREA

DO NOT WRITE IN THIS AREA

DO NOT WRITE IN THIS AREA

BLANK PAGE



DO NOT WRITE IN THIS AREA

DO NOT WRITE IN THIS AREA

DO NOT WRITE IN THIS AREA

BLANK PAGE



The periodic table of the elements

1	2	3	4	5	6	7	0	
7 Li lithium 3	9 Be beryllium 4	11 Na sodium 11	12 C carbon 6	13 Al aluminium 13	14 N nitrogen 7	15 O oxygen 8	16 F fluorine 9	17 Ne neon 10
19 K potassium 19	20 Ca calcium 20	23 Sc scandium 21	24 Ti titanium 22	25 V vanadium 23	26 Cr chromium 24	27 Mn manganese 25	28 Fe iron 26	29 Co cobalt 27
37 Rb rubidium 37	38 Sr strontium 38	39 Y yttrium 39	40 Zr zirconium 40	41 Nb niobium 41	42 Mo molybdenum 42	43 Tc technetium 43	44 Ru ruthenium 44	45 Rh rhodium 45
55 Cs caesium 55	56 Ba barium 56	57 La* lanthanum 57	72 Hf hafnium 72	73 Ta tantalum 73	74 W tungsten 74	75 Re rhenium 75	76 Os osmium 76	77 Ir iridium 77
85 Rb rubidium 37	88 Sr strontium 38	89 Y yttrium 39	91 Zr zirconium 40	93 Nb niobium 41	96 Mo molybdenum 42	[98] Tc technetium 43	101 Ru ruthenium 44	103 Rh rhodium 45
133 Cs caesium 55	137 Ba barium 56	139 La* lanthanum 57	178 Hf hafnium 72	181 Ta tantalum 73	184 W tungsten 74	186 Re rhenium 75	190 Os osmium 76	192 Ir iridium 77
131 Xe xenon 54	127 I iodine 53	122 Sb antimony 51	119 Sn tin 50	108 Ag silver 47	106 Pd palladium 46	112 Cd cadmium 48	115 In indium 49	122 As arsenic 33
86 Rn radon 86	85 At astatine 85	84 Po polonium 84	82 Pb lead 82	79 Au gold 79	78 Pt platinum 78	80 Hg mercury 80	204 Tl thallium 81	207 Pb lead 82
36 Kr krypton 36	35 Br bromine 35	34 Se selenium 34	32 Ge germanium 32	29 Cu copper 29	28 Ni nickel 28	30 Zn zinc 30	70 Ga gallium 31	75 As arsenic 33
18 Ar argon 18	17 Cl chlorine 17	16 S sulfur 16	14 Si silicon 14	13 Al aluminium 13	12 C carbon 6	15 P phosphorus 15	27 Al aluminium 13	31 P phosphorus 15
2 He helium 2	10 Ne neon 10	18 Ar argon 18	36 Kr krypton 36	54 Xe xenon 54	86 Rn radon 86	209 Bi bismuth 83	204 Tl thallium 81	207 Pb lead 82

1	H	1
	hydrogen	

relative atomic mass
atomic symbol
name
atomic (proton) number

Key

* The elements with atomic numbers from 58 to 71 are omitted from this part of the periodic table.

The relative atomic masses of copper and chlorine have not been rounded to the nearest whole number.



DO NOT WRITE IN THIS AREA

DO NOT WRITE IN THIS AREA

DO NOT WRITE IN THIS AREA